


U + Consonant / Compound Words

Jim **cut** up a **bun** and **put** out the **crumbs**.
More birds came to eat them up.

A. Hi! What sounds do the green letters make?




B. Can you say these sounds?

Trace. **ud ub ug um un up ur ut**

Write. _____

C. Colour it if it ends in **ug up ut un.**



D. Add a letter to make a word.

__ug



__ug



__ut



__ub



__up



__un



__un



__ud



__ug



__ut



Before you read

Why do we need to feed the birds in winter?

Feed the Birds

There was no sun and it was cold. Jim wanted to go out but it was too cold.

‘This is no fun!’ he said,
‘I want to go out and run around.’

He looked out the window.
The birds looked sad.
They had no food.


‘I’ll put out some food for the birds,’
said Jim to his mum.

He got some nuts and put them on the window sill.
The birds liked that.

He cut up a bun and put out the crumbs.
More birds came to eat these up.

‘Give them a sup of water too,’ said his mum.

‘This is fun!’ said Jim. ‘I hope it is cold again tomorrow.’



A. Questions:

1. Write the words in the story that end with these letters.

un _____

up _____

ut _____

2. What kind of day was it? _____

3. Why was it no fun for Jim? _____

4. What food did Jim put out? _____

B. Working with words

1. Underline the correct sentence.

It was a cold day.


It was a hot day.

He got nuts and put them out.

He got milk and put this out.

Jim put out coffee in a mug.

Jim put out water in a mug.



2. Find rhyming words in the box.

hum rub gut tub sun
nut rut run mum

cub

but

gum

fun

A. Two-in-one

Use the words in the box to complete the words below.

bird house ball foot gold cut

lady _____  _____ room 

light _____  _____ ball 

_____ fish  hair _____ 

B. Find two words in each of these.

The first one is done for you.

fireman fire man

newspaper news _____


workshop _____

ladybird _____

armchair _____

rainbow _____

upstairs _____




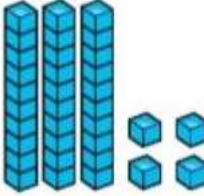
C. Crossword

Clues



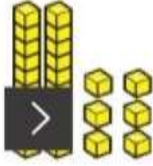


1. I wash in this room.
2. This man puts out fires.
3. A bug with spots on its back.
4. This is on the floor.

1.							
2.							
3.							
4.							


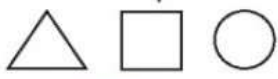
Monday

1. Colour 2 squares. Then colour 5 more. How many are coloured now?

2. $9 - 4 =$
3. $3 + 7 =$
4. Write these numbers in order, starting with the smallest: 15, 13, 9, 17.
, , ,
5. $5c + 3c + 7c =$
6. How many?

7. What day comes after Friday?
8. How many sides has a rectangle?
9. 1 ten 4 units =
10. $4 +$ $= 7$
11. Pete has 3 apples. Claire has 2 apples and Karl has 4 apples. How many apples have they altogether?
12. It usually takes 5 minutes to get from the school gate to the car. It took 3 minutes longer today because it was raining. How long did it take today?

Tuesday




1. Colour 3 counters red and 2 blue. How many are coloured now?

2. $3 + 8 =$
3. $10 -$ $= 4$
4. Write these numbers in order, starting with the largest: 9, 23, 26, 12.
, , ,
5. How much?

6. How many?

7. Colour the triangle.

8. What number comes after 10?
9. $6 +$ $= 9$
10. Which is in the middle: the ball, the pear or the car?
 
11. Adam buys a pen for three 10c coins. Andrew spends three 5c coins. How much do they spend in total?
12. There were 9 pencils on teacher's desk. She gave 6 away. How many were left?

Wednesday

1. Start at 0. Take 2 steps and then 4 steps. How many steps in total is that?
2. $2 + 3 + 4 =$
3. There were 9 birds on a line. 4 flew away. How many birds are left?
4. Write these numbers in order, starting with the smallest: 18, 16, 19, 17.
, , ,
5. Which is heavier: your sock or your shoe?
6. $11 -$ $= 7$
7. Tick how many 10c coins make up 50c. 
8. What number comes after 19?
9. Colour the shape that has one side. 
10. $12 + 5 =$
11. Ann had 19 crayons. She gave 7 to Fiona. How many had she left?
12. If there were 6 silver cars and 4 white cars in the car park, how many cars were there altogether?

/12

Thursday

1. Start at 0. Take 5 steps. Then take 4 more steps. How many steps in total is that?
2. $6 + 5 =$
3. $10 -$ $= 6$
4. Write these numbers in order, starting with the largest: 23, 19, 16, 24.
, , ,
5. How much?

6. Colour the shape that has three sides. 
7. What number comes before 18? 
8. Colour the boxes with even numbers.

9	10	11	12	13	14
---	----	----	----	----	----
9. $3 + 8 + 2 =$
10. Which is lighter: an apple or a house?
11. Harry bought a ball for 5c. Jenny spent three 2c coins on a pencil. How much money did they spend in total?
12. If Harry had bought two balls and Jenny had bought four pencils, how much money would they have spent?

/12



My
Very
Educated
Mother











SHEKNOWS



DESIGNOVAS.COM



Pufferfish

COLORFUL PAPER LOOP OCEAN CRAFT
OURKIDTHINGS.COM

